

Name: _____

Rounding to the Nearest Ten

Round each number to the nearest ten.

34 - _____

91 - _____

86 - _____

25 - _____

72 - _____

53 - _____

Star Numbers

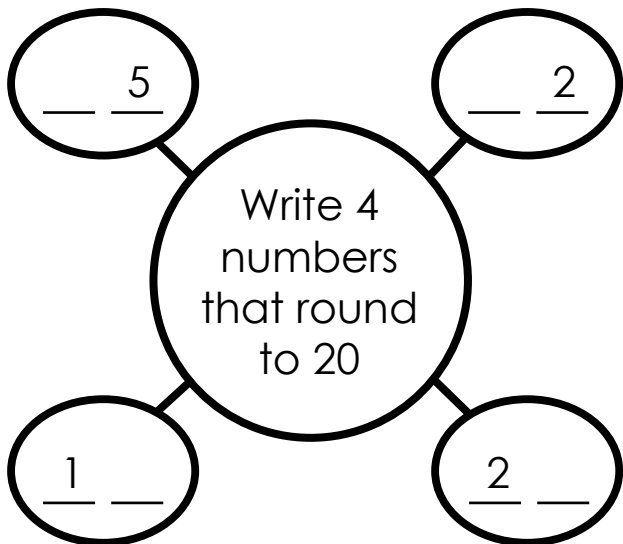


Which two star numbers round to 40?

_____ and _____

Which two star numbers round to 30?

_____ and _____



Write **True** or **False** for each statement.

27 rounds to 20. _____

8 rounds to 10. _____

94 rounds to 90. _____

ANSWER KEY

Rounding to the Nearest Ten

Round each number to the nearest ten.

$34 - \underline{\quad 30 \quad}$

$91 - \underline{\quad 90 \quad}$

$86 - \underline{\quad 90 \quad}$

$25 - \underline{\quad 30 \quad}$

$72 - \underline{\quad 70 \quad}$

$53 - \underline{\quad 50 \quad}$

Star Numbers



Which two star numbers round to 40?

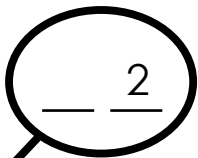
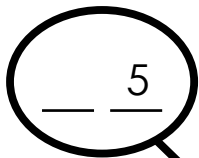
36 and 44



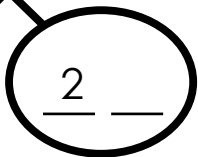
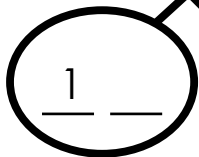
Which two star numbers round to 30?

31 and 27

Answers may vary



Write 4 numbers that round to 20



Write **True** or **False** for each statement.

27 rounds to 20. False

8 rounds to 10. True

94 rounds to 90. True